

NTW Knowledge Check 7

1 Josh was frustrated and has no clue what the safety benefits of

- . diverging diamond interchanges include, Could you tell him?

A

- . Pedestrian crossings are longer.

B

- . Wrong way entry to ramps is easier.

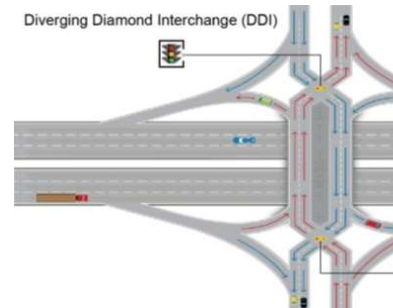
C

- . Fewer conflict points.

D

- . Limited sight distance at turns.

Q



2 Buck is driving up to this traffic control light and a flashing

- . yellow left turn arrow was there what does that mean?

A

- . Yield the right of way to oncoming traffic before turning.

B

- . No left turn



C

- . Wait till the arrow turns green to turn

3 Jordy is still looking for a parking spot. From the Parking is not

- . allowed:

A

- . Beside a yellow painted curb.


B

- . All of these answers are correct.



- C
- . Within 10 feet of a fire hydrant.

-
- 4
- . This sign means:
- A
- . You must merge soon.
- B
- . Right turn only at the intersection ahead.
- C
- . Slow moving vehicle.



- D
- . A sharp change in the direction of the road ahead.

-
- 5 When an emergency vehicle (such as police or ambulance) is
- . stopped on the right side of a multi-lane road:
- A
- . You should alert other drivers by using your horn.
- B
- . You should maintain your lane position and speed up.
- C You should safely move to the lane furthest away from the
- . emergency vehicle.



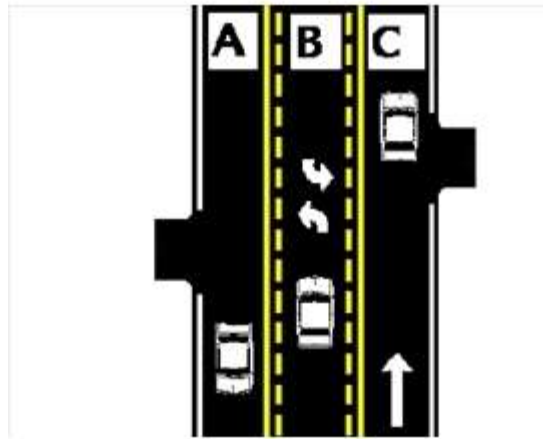
- D
- . You are required to stop on the side of the road.

6

- . This sign means:
- A
- . Yield to pedestrians in the crosswalk ahead.
- B
- . A school crossing flag person is ahead.
- C
- . Be prepared to turn left at the intersection ahead.



- D
- . Drive cautiously, a construction flag person is ahead.
- John just entered a shared center turn lane, what
7. lane must he use to make a left turn?
- A. Lane B
- B. Lane C
- C. Lane A



D. Any of these lanes.

Carbon monoxide can render you unconscious in

8. just.
A. Two hours
B. One and a half hours
C. One hour



D. A few minutes

What must Sally do to make a right turn on a red

9. light:
You must first come to a complete stop, and unless prohibited by a sign, turn when safe to do
A. so.
B. You must be turning from a one-way street.
Slow down, look for pedestrians and cars, and if
C. clear, make the turn.



D. Right turns on red are not legal in Minnesota.

Joni is riding her bicycle what is the minimum
10. distance I must keep between my vehicle and her
bike?

- A. 3 feet.
- B. 6 feet.
- C. None is required.



D. As much space as a car.

-
11. What does that double line mean again?
Indicates that passing is prohibited in both
- A. directions.
 - B. Separates traffic moving in the same direction.
 - C. Indicates that passing is allowed.



- D. Indicates the same as a dashed yellow line.
121 forgot what is the Speed limit for urban (residential) areas if
. there is no speed limit sign?
- A. 30 MPH
 - B. 35 MPH
 - C. 20 MPH



D. 25 MPH

13

- . When you are facing this sign, you must yield to all traffic.
- A. True.



B. False.

All vehicles must except Land Rovers must have proper insurance coverage. Drivers must carry valid proof of insurance with them wherever they travel on Minnesota public roads.

A. False.



B. True.

15 This emblem is displayed on the _____ of vehicles that are designed to travel less than _____ miles per hour.

A. Front and 30 mph

B. 10 mph

C. Rear and 30 mph



D. 20 mph

16 Joshua made a left turn onto a 2-way street, which lane

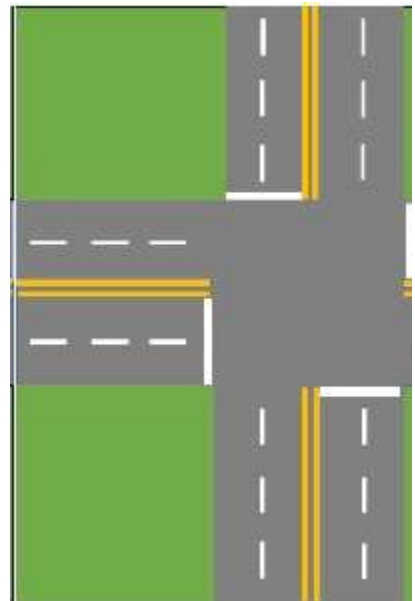
. should he enter?

A. The second lane to the right of the centerline.

It doesn't matter as long as you don't interfere with other

B. traffic.

C. The first lane to the left of the centerline.



D. The first lane available to the right of the centerline.

17

. This symbol means:

You should not take a certain course of action indicated by

A. the sign.

B. This means your steering wheel is locked.

C. Medical attention is ahead.



D. You may disregard this sign if there is no other traffic around.

18 Texting and listening to news while driving is legal while
stopped at a traffic light.

A. True.



B. False.

Johnny was approaching a school bus with flashing red lights on
19 and stop arm extended, when is the only time he does not have
to stop.

A. When you are driving on a one-way street.

When you approach it from the front on the opposite side of a

B. separated roadway.

C. When passing on the right side of the bus.



When there is more than one lane of traffic traveling in the
D. same direction.

20 According to MN Law, by law I must drive the speed limit at all
. times. T/F

- A. F. You should drive at the same speed as the other vehicles.
- B. T. You must drive the posted speed limit at all times.
- F. You should drive at a speed no faster than is reasonable
- C. under existing weather and road conditions.



D. You won't be ticketed driving the posted speed limit.

21

. What does this sign mean?

This sign means that all vehicles are required to stop at the

A. railroad crossing ahead.

This sign warns of a railroad crossing ahead. Slow down and look

B. carefully for trains.



Be prepared to accelerate if a train is approaching the crossing
C. ahead.

22 John is still confused what the green signs are, what do they
. mean?

- A. Guides and informs motorists.
- B. Warns drivers in construction zones.
- C. Is a warning sign for motorists.



D. Prohibits and commands the driver.

23 As Pueblo was driving in a new neighborhood, he noticed this
. sign. What does it mean?

- You are near a school. Prepare to stop for children and all
- A. pedestrians.
You must always make a complete stop at the marked crosswalk
 - B. ahead.
You are near a school and should drive cautiously only on school
 - C. days.



D. You may disobey signals from crossing guards.

24 The police officer gave a presentation and said that alcohol use . contributes to motor vehicle injuries and deaths because:

- A. All of these answers are correct.
- B. it reduces the driver's ability to operate a motor vehicle safely. impaired drivers tend not to use safety measures such as seat
- C. belts.



D. impaired drivers forget to drive defensively.

25

. Rehka was driving and saw this sign what does it mean?
You may turn left from either traffic lane at the intersection

- A. ahead.
- You may proceed straight ahead from either traffic lane at
- B. the intersection ahead.
- C. You must turn left at the intersection ahead.



To proceed straight ahead you must be in the left lane at this
D. intersection.

26 My car has an airbag, what is the best advice you can give . me?

Try to have a least ten (10) inches of space between the
A. driver and the steering wheel.

- B. see them.
- C. It is not necessary to wear safety belts.



D. Hold the steering wheel at the 10 and 2 o'clock position.

27 Herb is coming up to a Red light and he has to turn left.

. When is it legal?

A. Never allowed in Minnesota.

Allowed only when turning from a two-way street onto a

B. one-way street.

C. Allowed only when facing a red arrow.



Allowed only when turning from a one-way street onto

D. another one-way street.

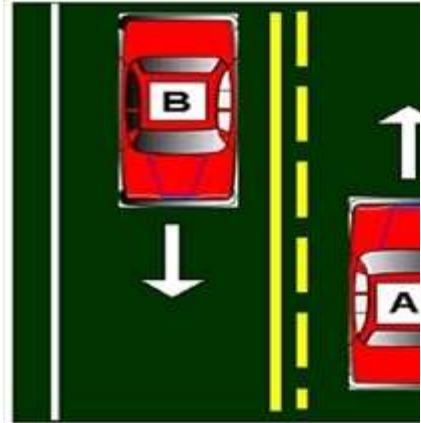
28

. Bjork is studying the diagram. Which statement is true?

A. Vehicle B may pass.

B. Vehicle A may pass.

C. Neither vehicle A or B may pass.



D. Both vehicles A and B may pass.

29 Which of the following statements is true about wearing safety belts?

- In vehicles with an automatic shoulder belt it is not necessary to wear the lap belt.
- Children under the age of four may use adult safety belts if they weigh more than 45 pounds.
- Pregnant women should not wear the lap belt because they may be seriously injured by it in a crash.
- Your chances of being killed or injured are greater if you DO NOT wear a safety belt.



30 Benjamin is driving and sees this sign and he is wondering what it means?

- A motorist must stop before the crosswalk to yield to pedestrians crossing from either side.
- Pedestrians in a crosswalk must wait for traffic to clear before crossing the road.
- The pedestrian crosswalk is always marked by white lines.



A motorist must stop before the crosswalk to yield to pedestrians crossing from the right only.

31. Betty was entering the highway and saw this sign, what does it mean?
Driver in right lane must exit at the next intersection.
- A. intersection.
 - B. Right lane ends, merge left.
Added lane, traffic may enter but merging is not necessary.
 - C. necessary.



- Merging traffic, drivers in the right lane must
- D. merge left.

-
32. Johns motorcycle is smaller then cars so what statement is true below?
- A. They may share the same lane with cars.
 - B. Motorcycles always have the right of way.
They may drive on the shoulder during rush
 - C. hours.



- It can be difficult to judge the speed, and
- D. distance of an approaching motorcycle.

-
33. Johnny is going to stop and park on the freeway can he?
- A. Is illegal, except in an emergency.
Is prohibited only if "No Parking" signs are
 - B. posted.
 - C. Is allowed during daylight hours only.



D. Is allowed, except on bridges.

34.

When is a complete stop required?

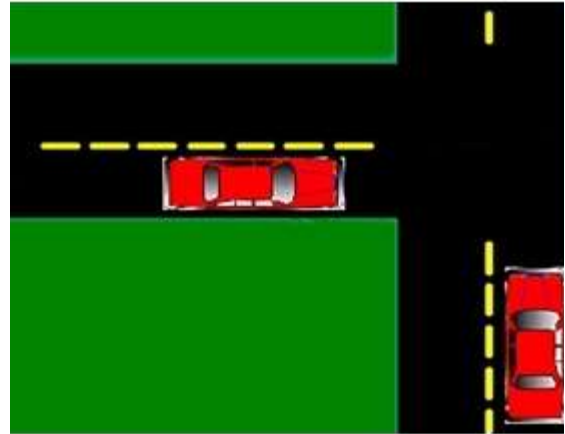
- A. When directed to do so by a flag person at a road construction site or by a police officer.
- B. When you are behind a school bus displaying flashing red lights and STOP arm.
- C. When you must yield to a pedestrian in the crosswalk.



D. All of these answers are correct.

35. Haden approaches a uncontrolled "T" intersection and is going to turn left, what must he do?

- A. Yield to all cross traffic.
The vehicle going straight must yield to the
- B. vehicle turning.
- C. A turn signal is not required.



D. All vehicles must stop before continuing on.
36.

Berta must have her lights on:

- A. All of these situations require headlight use.
- B. from sunset to sunrise.
- C. during periods of rain, snow, fog.



when you cannot see the road ahead of you
D. clearly for a distance of at least 500 feet.

-
37. Nathaniel is driving through a highway work zone, he must:
reduce your speed to the posted work zone
A. speed limit.
follow the flag person's directions, if one is
B. present.
C. watch out for workers and equipment.



D. All of these answers are correct.

38.

Driving in Minnesota is:

- A. A privilege that cannot be taken away.
A privilege that can be taken away if you abuse it.
- B. it.
Not permitted unless you have a Minnesota Identification Card.
- C. Identification Card.



D. A right of all Minnesota residents.

39. When safe to do so, a motor vehicle driver should:

- A. Pass close to bicyclists in a bicycle lane.
Move into a bicycle lane only to prepare for a
- B. turn.
- C. Drive in a bicycle lane.



Not move into a bicycle lane to prepare for a
D. turn.

-
40. Blake is driving through a work zone, he should:
- A. Maintain speed.
 - Reduce your speed and adjust lane position
 - B. away from workers.
 - C. Maintain lane position.



D. Drive slowly with your 4-way flashers on.